

---

## Automata and Formal Languages

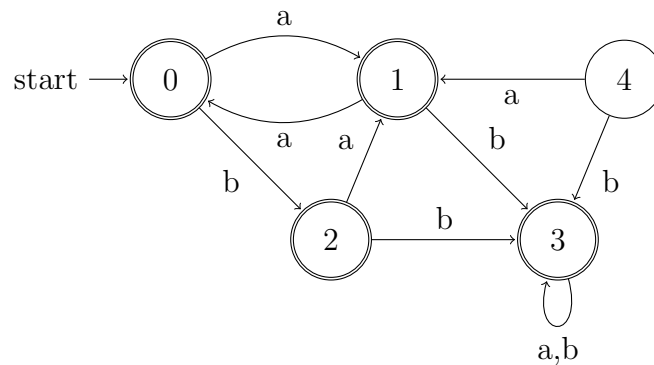
---

*Due November 04, 2014 before class!*

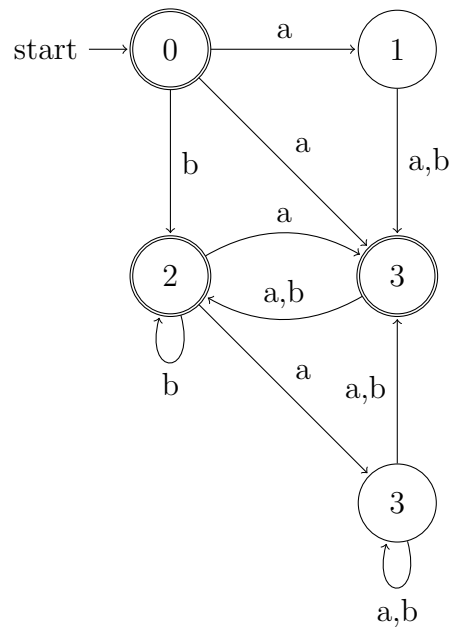
### Exercise 1 (Universality - 10 points)

Decide if the following automata are universal or not. Use the methods from the lecture.

(a)



(b)



## Exercise 2 (DFA Operations - 10 points)

(a) Construct DFAs  $M_1$  and  $M_2$  for

- $r_1 = aa^*bb$
- $r_2 = aabb^*$

(b) Construct automata recognizing

- $\mathcal{L}(M_1) \cup \mathcal{L}(M_2)$
- $\mathcal{L}(M_1) \cap \mathcal{L}(M_2)$
- $\mathcal{L}(M_1) \Delta \mathcal{L}(M_2)$

using the method from the lecture.

## Exercise 3 (NFA Operations - 10 points)

(a) Construct NFAs  $N_1$  and  $N_2$  recognizing

- $r_1 = aaa^*aab$
- $r_2 = aa^*ab$

(b) Construct automata recognizing

- $\mathcal{L}(N_1) \cup \mathcal{L}(N_2)$
- $\mathcal{L}(N_1) \cap \mathcal{L}(N_2)$

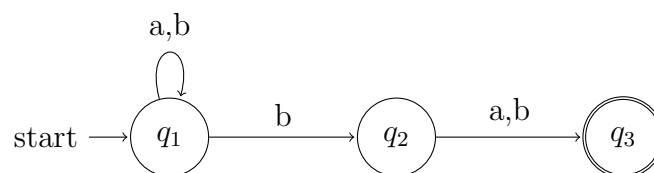
using the methods shown in the lecture.

## Exercise 4 (Star-free expressions II - 10 points)

Recall the definition of star-free expressions from the previous problem set.

Let  $A = (Q, \Sigma, \delta, q_{init}, F)$  be a finite automaton with states  $Q = \{q_1, \dots, q_n\}$ . To every input letter  $a \in \Sigma$  we associate a adjacency matrix  $M_a \in \{0, 1\}^{n \times n}$  in which the entry  $(i, j)$  is 1 if  $\delta(q_i, a) = q_j$  and 0 else.

(a) Consider the following automaton:



The corresponding adjacency matrices are:

$$M_a = \begin{pmatrix} 1 & 0 & 0 \\ 0 & 0 & 1 \\ 0 & 0 & 0 \end{pmatrix} \quad M_b = \begin{pmatrix} 1 & 1 & 0 \\ 0 & 0 & 1 \\ 0 & 0 & 0 \end{pmatrix}$$

We define the map  $h : \Sigma^* \rightarrow \{0, 1\}^{3 \times 3}$  as follows:

$$\begin{aligned} h(\epsilon) &= I_3 \\ h(a) &= M_a \\ h(b) &= M_b \\ h(a_1 a_2 \dots a_k) &= h(a_1) \cdot h(a_2) \cdot \dots \cdot h(a_k) \end{aligned}$$

- For  $w \in \Sigma^*$  describe what  $h(w)$  represents.
  - Draw a graph with vertex set  $h(\Sigma^*) = \{h(w) \mid w \in \Sigma^*\}$  such that there is an edge between  $q$  and  $q'$  labeled by  $a$  if  $q \cdot h(a) = q'$ . Start drawing the graph at  $h(\epsilon)$ .
  - How can you obtain a deterministic automaton accepting the same language as the original non-deterministic automaton?
- (b) Let  $L$  be a regular language and  $M$  the minimal DFA accepting  $L$  with states  $Q = \{q_1, \dots, q_n\}$ . We define  $h$  similarly as in the previous exercise and denote by  $S_L$  the set  $h(\Sigma^*)$ .  $S_L$  is called the *syntactic monoid* of  $L$ . A theorem by Schützenberger[1] states that  $L$  is representable by a star-free expression iff  $M^n = M^{n+1}$  for all  $M \in S_L$  with  $n = |Q|$ .

- Show that  $\mathcal{L}((aa)^*)$  is not representable by a star-free expression.
- Show that  $\mathcal{L}((ab + ba)^*)$  is representable by a star-free expression.

## Literatur

- [1] Marcel Paul Schützenberger. On finite monoids having only trivial subgroups. *Information and control*, 8(2):190–194, 1965.